

ST. XAVIER'S SENIOR SECONDARY SCHOOL, DELHI-54

Class : 2

SUMMATIVE ASSESSMENT 1

Marks: 60

Date: 12.09.14

MATHS

Time: 1 hour

Name: _____ Class & Sec. _____ R. No. _____

Note: All the answers should be done on the question paper itself.

1. **Mental Maths:** (1x10=10)

a) $85 =$ _____ (write the number name)

b) $20 + 6 =$ _____

c) $3 \times 7 =$ _____

d) Sixty three = _____ (write the number)

e) $14 + 5 =$ _____

f) $3 \times 9 =$ _____

g) 401 is a _____ number. (even / odd)

h) $43 + 10 =$ _____

i) Circle the even number: 783, 291, 476, 337

j) $4 \times$ _____ = 24

2. **Tick (✓) the correct answer:** (1x10=10)

a) The ordinal number for 2 is:

(i) Twoth (ii) second (iii) two

b) _____ is the next odd number after 81.

(i) 83 (ii) 84 (iii) 82

c) 42 is written as:

(i) Fourty two (ii) Forty to (iii) Forty two

d) $642 +$ _____ = 642.

(i) 0 (ii) 642 (iii) 1

e) _____ is the odd number.

(i) 774 (ii) 772 (iii) 771

f) Ninety nine = _____

(i) 49 (ii) 99 (iii) 94

g) $100 + 87 =$ _____

(i) 187 (ii) 8700 (iii) 871

h) The answer of addition is called _____

(i) difference (ii) sum (iii) odd number

i) The ordinal number for 17 is:

(i) Seventeen (ii) seventeenth (iii) seventh

j) _____ is the even number.

(i) 653 (ii) 536 (iii) 635

3. **Add the following:** (1½x6=9)

a) T O

$$\begin{array}{r} 55 \\ + 12 \\ \hline \\ \hline \end{array}$$

b) T O

$$\begin{array}{r} 63 \\ + 20 \\ \hline \\ \hline \end{array}$$

c) T O

$$\begin{array}{r} 43 \\ + 38 \\ \hline \\ \hline \end{array}$$

d) H T O

$$\begin{array}{r} 184 \\ + 703 \\ \hline \\ \hline \end{array}$$

e) H T O

$$\begin{array}{r} 762 \\ + 159 \\ \hline \\ \hline \end{array}$$

f) H T O

$$\begin{array}{r} 455 \\ + 238 \\ \hline \\ \hline \end{array}$$

4. **Write the next two even numbers:** (1x4=4)

a) 54, 56, _____, _____

b) 72, 74, _____, _____

c) 48, 50, _____, _____

d) 26, 28, _____, _____

5. **Write the next two odd numbers:** (1x4=4)






a) 81, 83, _____, _____

b) 59, 61, _____, _____

c) 37, 39, _____, _____

d) 13, 15, _____, _____

6. **Ring the objects in pairs. Count and write the numbers in correct column:** (1x5=5)

		EVEN	ODD
1)			
2)			
3)			
4)			
5)			

8. **Answer the following:** (1x6=6)

In the word **TELEVISION**,

- a) Letter T is at the _____ place.
- b) Letter _____ is at the 6th and the 8th places.
- c) Letter E is at the _____ and the _____ places.
- d) Letter N is at the _____ place.
- e) Letter _____ is at the 5th place.
- f) Letter _____ is the 7th place.

9. **Write number names of the given numbers:** (1x6=6)

- a) 49 = _____
- b) 97 = _____
- c) 32 = _____
- d) 22 = _____
- e) 14 = _____
- f) 51 = _____

10. **Write in figures:** (1x6=6)

- a) Eighty six = _____
- b) Fifty five = _____
- c) Twenty one = _____
- d) Twelve = _____
- e) Sixty four = _____
- f) Seventy = _____
