

ST. XAVIER'S SENIOR SECONDARY SCHOOL, DELHI-54

Class : 2

SUMMATIVE ASSESSMENT 2

Marks: 60

Date: 27.02.15

MATHS

Time: 1 hour

Name: _____ Class & Sec. _____ R. No. _____

Note: All the answers should be done on the question paper itself.

1. **Mental Maths:** (1x10=10)

- a) $36 \div 4 =$ _____
- b) There are _____ days in a leap year.
- c) $6 \times 8 =$ _____
- d) Thursday comes after _____
- e) $9 \times$ _____ $= 0$
- f) $7 \div 7 =$ _____
- g) $\square \times \square = 63$
- h) $0 \div 16 =$ _____
- i) Republic Day falls in the month of _____
- j) _____ $\times 1 = 10$


2. **Tick (✓) the correct answer:** (1x5=5)

- a) Multiplication means repeated _____
 (i) addition (ii) subtraction (iii) multiplication
- b) If today is 25.12.2014, which month is it?
 (i) March (ii) July (iii) December
- c) For division, we use the tables of
 (i) addition (ii) multiplication (iii) subtraction
- d) 8×9 is equal to
 (i) $8+9$ (ii) $9 - 8$ (iii) 9×8
- e) How many weeks make one year?
 (i) 52 (ii) 62 (iii) 42

3. **Write the multiplication fact for the following:** (1½x4=6)

- a) $8 + 8 + 8 + 8 =$ _____ \times _____ $=$ _____
- b) $3 + 3 + 3 =$ _____ \times _____ $=$ _____
- c) $5 + 5 + 5 + 5 + 5 =$ _____ \times _____ $=$ _____
- d) $10 + 10 + 10 + 10 + 10 =$ _____ \times _____ $=$ _____


4. **Divide** the following things **by circling** them in groups and fill in the blanks: (1x4=4)




14 ÷ 7 = _____



16 ÷ 4 = _____




10 ÷ 2 = _____



18 ÷ 3 = _____

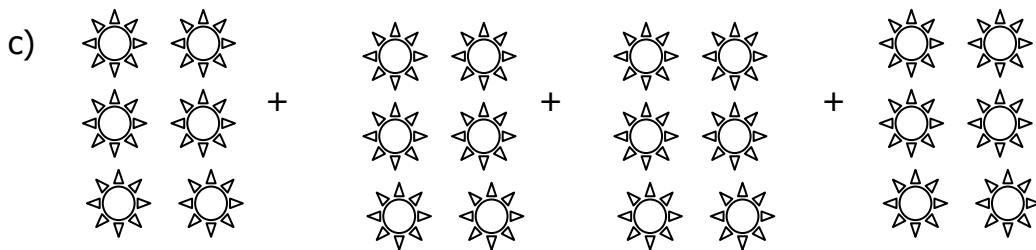
5. **Look at the picture and write the multiplication fact:** (1½x4=6)




_____ x _____ = _____



_____ x _____ = _____



_____ x _____ = _____



_____ x _____ = _____

6. Write one division fact for the following:

(1½x4=6)

a) 3 x 9 = 27 _____ ÷ _____ = _____

b) 6 x 4 =24 _____ ÷ _____ = _____

c) 8 x 8 = 64 _____ ÷ _____ = _____

d) 2 x 4 = 8 _____ ÷ _____ = _____

7. Look at the calendar and answer the following:

(1x3=3)

November – 2014

Sunday	Monday	Tuesday	Wednesday	Thursday	Friday	Saturday
						1
2	3	4	5	6	7	8
9	10	11	12	13	14	15
16	17	18	19	20	21	22
23	24	25	26	27	28	29
30						

a) How many days are there in the month of November? _____

b) Children’s Day is celebrated on _____ every year.

c) What is the day on 19th November 2014? _____

8. Multiply:

(2x4=8)

a) T O
 3 8
x 2

b) H T O
 6 3
x 6


c) H T O
 1 0 9
x 7

d) H T O
 1 4 8
x 5

9. Draw the hands of the clock to show the given time: -


(1x2=2)

a)



6: 00

b)




5: 30

10. Write the time shown in each clock:


(1x2=2)

a)



Time: _____

b)



Time: _____

11. Divide: -

(2x4=8)

a) $5 \overline{) 85}$

b) $9 \overline{) 99}$

Q —
R —

Q —
R —

c) 3 4 6 2

d) 6 7 6 5

Q —
R —

Q —
R —
